
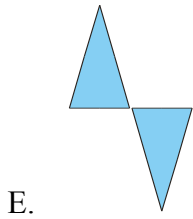



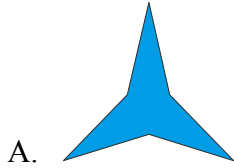


Measuring Symmetry

1. Order the figures below from least symmetry to most symmetry.



2. Create and describe in detail a method for measuring a figure's symmetry.